


Name _____

1 How many beanbags are there?



_____ beanbags

2 Complete the missing numbers.

44	45	46	47		
----	----	----	----	--	--

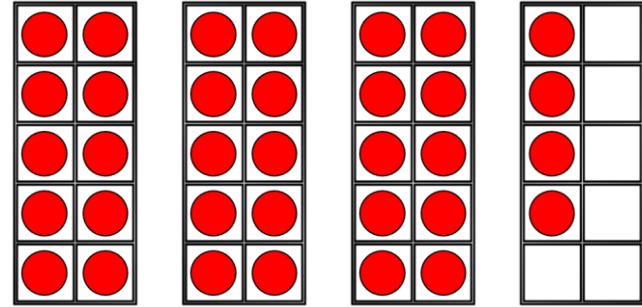
26	27	28			
----	----	----	--	--	--

1 mark

1 mark

1 mark

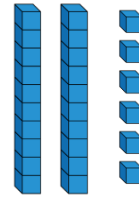
3 How many counters are there?



_____ counters

1 mark


4 Amy makes a number.



What number has Amy made?

1 mark

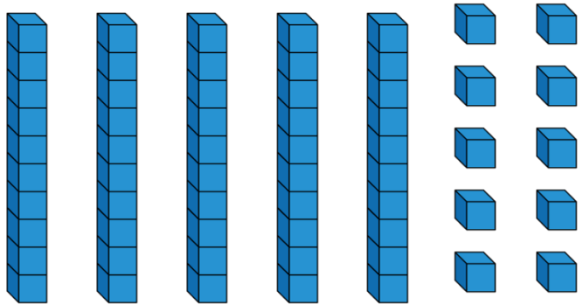
Sam makes a number.



What number has Sam made?

1 mark

5 Circle 35



1 mark

6 Complete the sentences.

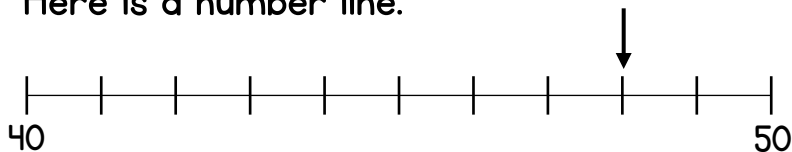
1 more than 38 is

1 less than 30 is

24 is 1 less than

2 marks

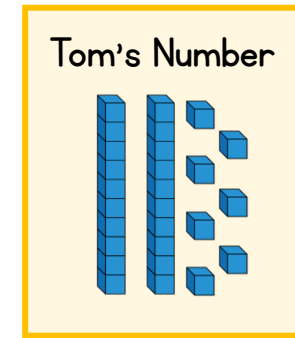
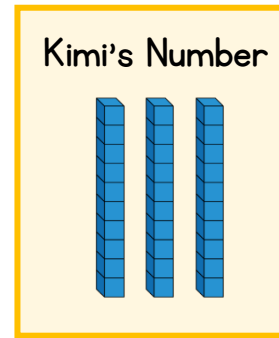
7 Here is a number line.



What number is the arrow pointing to?

1 mark

8 Kimi and Tom have each made a number.



Who has made the smallest number?

Circle your answer.

Kimi

Tom

They have made the same number.

1 mark

9 Circle the largest number.

35

38

29

1 mark

Circle how confident you feel with place value within 50

1

2

3

4

5

Not confident

Very confident

1 mark