


Name \_\_\_\_\_



1 Lee has 12 apples.




He eats 5 of the apples.

How many apples does he have left?

\_\_\_\_\_ apples

1 mark

2 There are 18 birds.



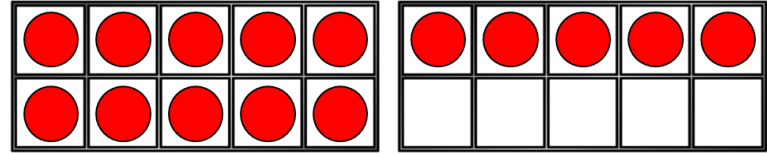
14 birds fly away.

How many are left?

\_\_\_\_\_ birds

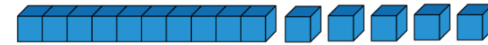
1 mark

3 Work out  $15 - 7 =$




1 mark

Work out  $15 - 12 =$




1 mark

4 There are 14 sweets in a bag.  
5 of the sweets are red.



The rest of the sweets are green.

How many green sweets are there in the bag?

\_\_\_\_\_ green sweets

1 mark

5 Complete the missing numbers.

$$15 - \square = 12$$

$$15 - \square = 13$$

$$15 - \square = 15$$

6 Teddy has 11 beanbags.



Lily has 7 beanbags.



How many more beanbags does Teddy have than Lily?

\_\_\_\_\_ beanbags

7 Work out  $17 - 9 = \square$

2 marks


1 mark

1 mark


8  $13 - \square = 5$

1 mark

9 Sam has 12 pencils.



Ben has 5 pencils.



Sam gives Ben some of his pencils.

Ben now has 13 pencils.

How many pencils does Sam give Ben?

\_\_\_\_\_ pencils

1 mark

How many pencils does Sam have left?

\_\_\_\_\_ pencils

1 mark

Circle how confident you feel with addition & subtraction.

1                      2                      3                      4                      5  
Not                      Very  
confident                      confident